

ROD MATS

BLUE IS WHOLE
(Ninths)

Picture Puzzles

Creator ... Doug. Williams
Publisher ... Mathematics Centre
© Doug. Williams

COPYRIGHT AGREEMENT

With due acknowledgement to the creator, this resource may be freely used, shared, reproduced or distributed in perpetuity.

The preceding paragraph overrides any previous copyright provision in earlier versions.

Prepared for free distribution February 2025.

This resource cannot be used for commercial gain.

This Picture Puzzle is based on
... Task 202, Rod Mats
Teaching Notes
... mathematicscentre.com/picturepuzzles/teachingnotes.htm

Picture Puzzles

To Do

1. Make a Rod Mat from a whole.
2. Name the parts of the whole shown by the mat.
3. Find more than one name for some parts.
4. Create and record equations using your names.

You Need

- A set of coloured rods called Cuisenaire Rods

Picture Puzzles

1. A rod mat starts with a whole.

Picture Puzzles

1. A rod mat starts with a whole.
2. Let's choose blue.

Picture Puzzles

1. A rod mat starts with a whole.
2. Let's choose blue.

Blue is the WHOLE

Picture Puzzles

1. A rod mat starts with a whole.
2. Let's choose blue.

Blue is the **WHOLE**

3. To make the mat, build rows below the whole.

Picture Puzzles

1. A rod mat starts with a whole.
2. Let's choose blue.

Blue is the WHOLE

3. To make the mat, build rows below the whole.
 - Each row is the *same length* as the whole.
 - Rods in each row are the *same colour*.

Picture Puzzles

1. A rod mat starts with a whole.
2. Let's choose blue.

Blue is the WHOLE

3. To make the mat, build rows below the whole.
 - Each row is the *same length* as the whole.
 - Rods in each row are the *same colour*.

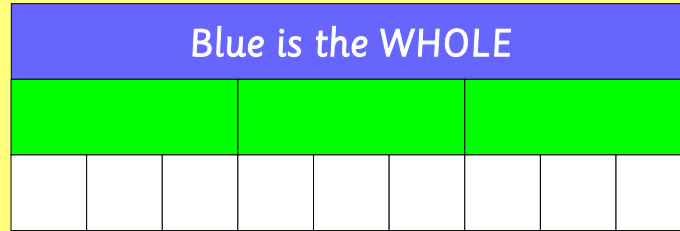
Make the rod mat for Blue now.

...

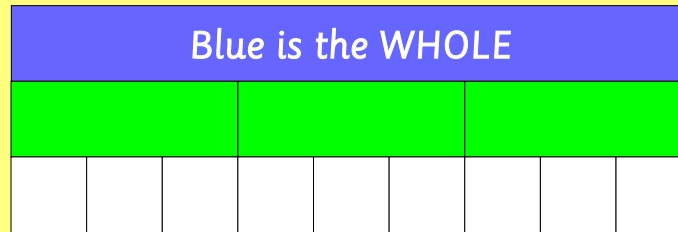
Then check on the next slide.

Picture Puzzles

Blue is the WHOLE								



Blue is the whole.
Each rod row shows the whole split into equal parts.
Equal parts of a whole are called Fractions.



Blue is the whole.

Each rod row shows the whole split into equal parts.
Equal parts of a whole are called Fractions.

**Choose one rod of each colour.
Tell each other its fraction name.
Tell each other how you know.
Then check with the next slides.**

Picture Puzzles

Zhu said:
Light green is one third.

Blue is the WHOLE								

Picture Puzzles

Zhu said:

Light green is one third.

Aran said:

How do you know?

Blue is the WHOLE								

Picture Puzzles

Zhu said:

Light green is one third.

Aran said:

How do you know?

Zhu answered:

I know what the whole is...

Blue is the WHOLE								

Picture Puzzles

Zhu said:

Light green is one third.

Aran said:

How do you know?

Zhu answered:

I know what the whole is.

Light green splits the whole into equal parts...

Blue is the WHOLE								

Picture Puzzles

Zhu said:

Light green is one third.

Aran said:

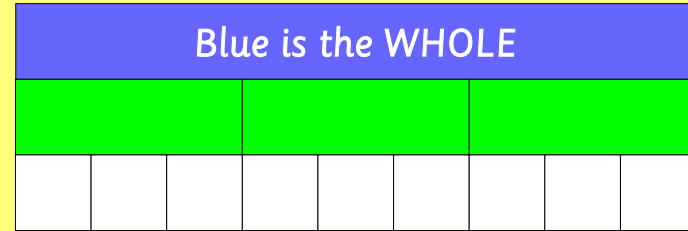
How do you know?

Zhu answered:

I know what the whole is.

Light green splits the whole into equal parts.

There are three parts so I can say third...



Picture Puzzles

Zhu said:

Light green is one third.

Aran said:

How do you know?

Zhu answered:

I know what the whole is.

Light green splits the whole into equal parts.

There are three parts so I can say third.

So one light green is one third.

Blue is the WHOLE								

**In your journal
write what Zhu and Aran
said about white.**

Picture Puzzles

In your journal explain
how to find another
fraction name for:

- (a) one third
- (b) 2 thirds
- (c) three thirds
- (d) 1 ninth + 5 ninths
- (e) 1 third + 3 ninths
- (f) two thirds + 4 ninths - 1 whole
- (g) 9 x one ninth
- (h) two thirds + $\frac{4}{9}$
- (I) half of $\frac{2}{3}$

Blue is the WHOLE								

Picture Puzzles

Find the simplest fraction that completes the whole and write an equation in your journal. Example:

Start with $\frac{2}{3}$.

Complete with $\frac{1}{3}$.

$$\frac{2}{3} + \frac{1}{3} = 1$$

(a) Start with $\frac{1}{3}$

(b) Start with $\frac{2}{9}$

(c) Start with $\frac{3}{9}$

(d) Start with $\frac{4}{9}$

(e) Start with $\frac{8}{9}$

(f) Start with $\frac{6}{9}$

Blue is the WHOLE								

The fraction that completes the whole
is called the **complement**
of the starting fraction.

**Picture
Puzzles**

more

**Picture
Puzzles**

Picture Puzzles

Choose any *three rods* from the mat.

Find at least one more fraction name for them.

Record your rods and an equation in your journal.

This is an example of an equation with three rods:
one third + one third - one ninth = 5 ninths

Blue is the WHOLE								

Picture Puzzles

Choose any *four rods*
from the mat.

Find at least one more
fraction name for them.

Record your rods and an equation in your journal.

Blue is the WHOLE								

Picture Puzzles

Go Crazy

Set a timer and both write
all the equations you can.

When the time stops check each other's work.

Blue is the WHOLE								

even more

Suppose you had to work out this equation.

$$\frac{1}{2} - \frac{1}{6} =$$

What would you choose as your whole?

Explain why.

THE END...

...OR IS IT?