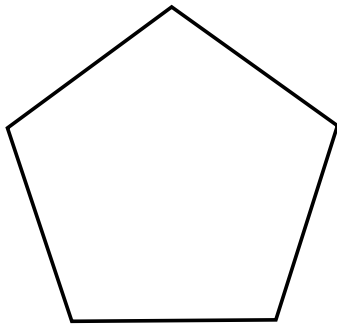


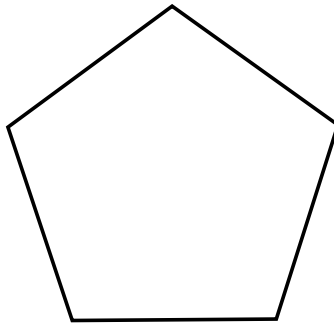
BOX HUNT 3

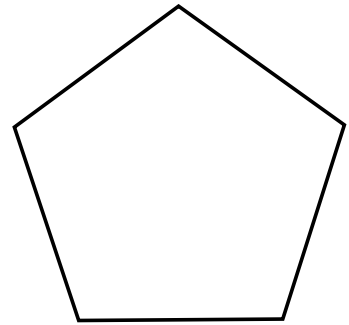
- Write any whole number inside the first box.
- Add 1 to it and write that number inside the next box.
- Keep adding one and writing the numbers until the boxes run out.
- Now you are ready to investigate.

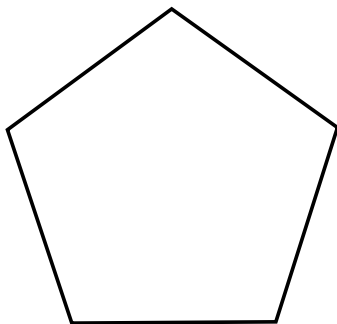
At each box you have to share the number equally between the corners.

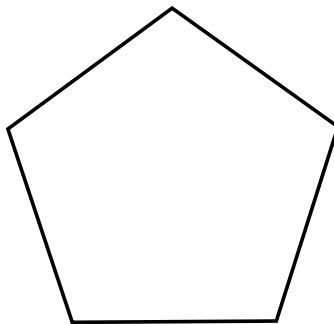
1. Guess what number will be in each corner. Write it on the line.
2. Divide with the calculator to check your guess. Write the answer in each corner.
3. Repeat at each box until the boxes run out.

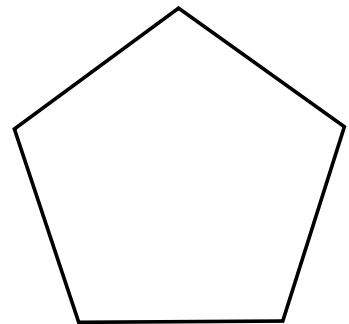


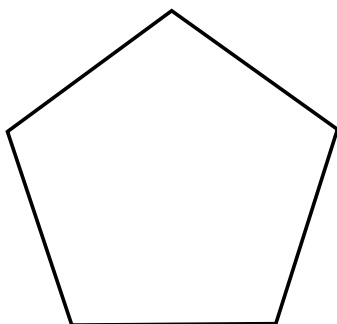


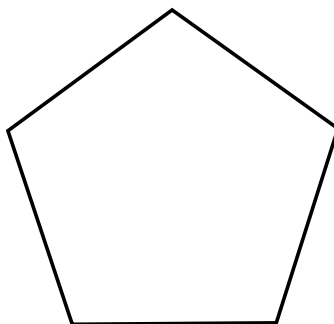


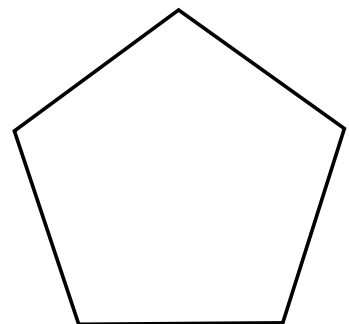












What patterns do you see? What do they mean? (Write in this space.)